

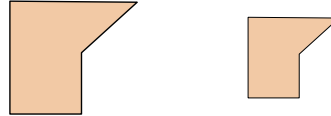


Determine if the shapes shown are 'similar', 'congruent' or 'neither'.

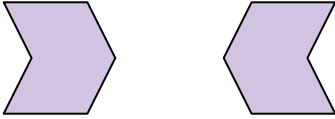
1)



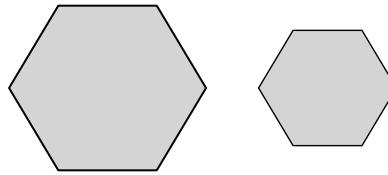
2)



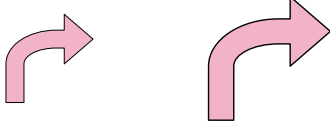
3)



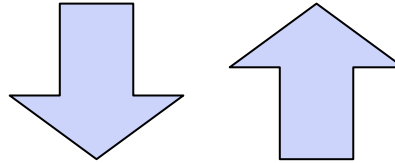
4)



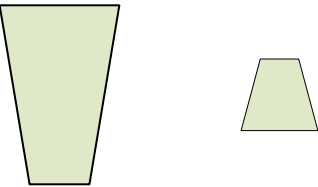
5)



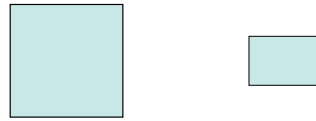
6)



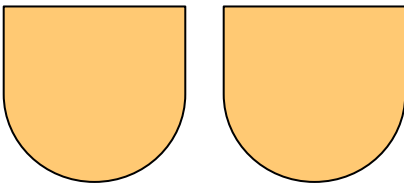
7)



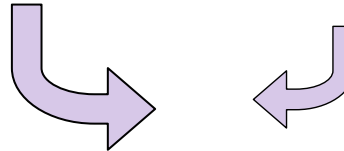
8)



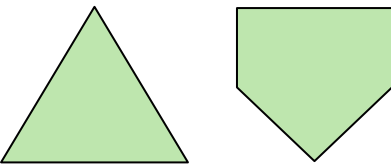
9)



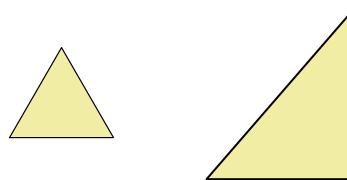
10)



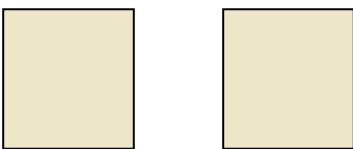
11)



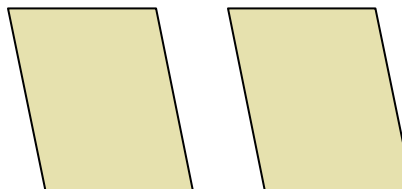
12)




13)




14)



15)



16)



Answers

1. similar

2. similar

3. congruent

4. similar

5. similar

6. congruent

7. neither

8. neither

9. congruent

10. similar

11. neither

12. neither

13. congruent

14. congruent

15. neither

16. neither